

**Weekly Tasks/Activities for Home Learning**



**Week beginning: Monday 13<sup>th</sup> July 2020**

Hello Year 4,

As it is the final half term of this academic year, we are challenging you to explore how much you can remember about each topic. Therefore, every week, we will revisit one of the exciting topics we have learnt about this year.

**Our revision topic this week will be our learning from Summer 2: Amazon**



Yr 4	Maths	Reading and Literacy	Topic	Active/ Mindfulness
	<p>Log into <b>purple mash</b> and choose a maths activity to complete such as Monster Multiplication, 2Race or many others.</p> <p>Practise your times tables – learn a song or poem to help you remember them.</p> <p>This YouTube video is a catchy way to learn them:  <a href="https://www.youtube.com/watch?v=dSnNkgMbtfs&amp;t=1s">https://www.youtube.com/watch?v=dSnNkgMbtfs&amp;t=1s</a></p> 	<p>Practice the following spellings:</p> <p>possible</p> <p>potatoes</p> <p>pressure</p> <p>probably</p> <p>promise</p> <p>purpose</p> <p>quarter</p> <p>question</p>	<p>Check out these documentaries about the Amazon to help you learn about this fascinating topic:</p> <p><a href="https://www.youtube.com/watch?v=CKUx1aSC9MU">https://www.youtube.com/watch?v=CKUx1aSC9MU</a></p> <p><a href="https://www.youtube.com/watch?v=uFKhFOZnJP0">https://www.youtube.com/watch?v=uFKhFOZnJP0</a></p> <p><b>Tasks:</b></p> <ol style="list-style-type: none"> <li>1) Create an information leaflet about the amazon</li> <li>2) Choose a rainforest animal and create a presentation about it</li> <li>3) Choose a plant (e.g. Venus fly trap, pitcher plant etc.) and make a model out of junk</li> <li>4) Write a story based in the Amazon</li> </ol>	<p><b>Active:</b></p> <p><b>HIIT</b> stands for <b>High Intensity Interval Training</b>. This gets your heart racing and lungs working. Do each activity for 30 seconds and then rest of 20 seconds, before starting the next activity: <i>(Warm up – light jogging and stretching)</i></p> <ol style="list-style-type: none"> <li>1. Jogging on the spot</li> <li>2. Bunny jumps</li> <li>3. Push ups on your knees</li> <li>4. Squats</li> <li>5. Star jumps</li> </ol> <p><b>Mindfulness:</b></p>  <p>Try one of these mindfulness exercises to relax and feel calm:</p> <p><b>Sound meditation</b> - Snuggle down somewhere safe, close your eyes and listen to all the sounds around you. What can</p>

### Sum up

Choose from these four cards.




Make these totals:

- 9
- 10
- 11
- 12
- 13
- 14
- 15

What other totals can you make from the cards?

### Three monkeys



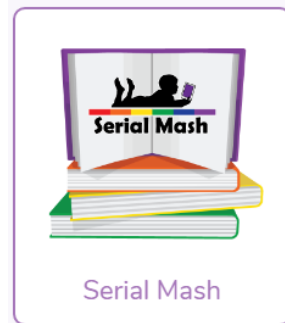
Three monkeys ate a total of 25 nuts.  
Each of them ate a different odd number of nuts.

How many nuts did each of the monkeys eat?  
Find as many different ways to do it as you can.

Now write sentences using these new words.

### Reading

Click on Serial Mash (part of purple mash) to access hundreds of books



You also get quizzes after you have read a chapter.

Check out Oxford Books online. There are offering free ebooks to support your reading as schools are closed.

<https://home.oxfordowl.co.uk/>

### SPAG

Correct these sentences:

you hear? The clink of coffee cups, snippets of conversation, sounds from nature? Get curious and feel the buzz of life around you.

### Balloon belly breathing -

Lie down somewhere comfy and imagine there is a balloon in your tummy. As you breathe in, imagine the balloon slowly inflates. As you breathe out, the balloon effortlessly deflates. Children can rest their favourite toy on their tummy and let them go along for a calming ride.

### Dan the detective

1. Dan the detective looked for a number.  
He found a two-digit number less than 50.  
The sum of its digits was 12.  
Their difference was 4.  
What number did Dan find?



2. Dan found a two-digit odd number.  
One of its digits was half the other.  
The number was greater than 50.  
What number did Dan find?

### Spaceship



Some Tripods and Bipods flew from planet Zeno.  
There were at least two of each of them.

Tripods have 3 legs.  
Bipods have 2 legs.  
There were 23 legs altogether.

How many Tripods were there?  
How many Bipods?

Find two different answers.



the tower was green.

The boy called jack is eleven  
years old yesterday.

What is your name!

Hey, stop running?

Tayors dog is really cute.

Jack john michael and terry are  
in my football team.