




Date:

WALT: Subtract using the column method
(Consolidation)

Solve the following questions in your Maths books using the column method. Use base 10 or counters to help you.

Hundreds	Tens	Ones
		

1)

Subtract 40 from this number. Use the column method to find your answer.

2) $233 - 31 =$

3) $646 - 164 =$

4) $731 - 229 =$

5) $415 - 149 =$

Challenge: Solve the missing number.

$$254 + \underline{\quad} = 687$$

