



Weekly Tasks/Activities for Home Learning

Week beginning: Monday 22nd June 2020

Hello Year 4,

As it is the final half term of this academic year, we are challenging you to explore how much you can remember about each topic. Therefore, every week, we will revisit one of the exciting topics we have learnt about this year.

Our revision topic this week will be our learning from Spring 1: United Kingdom



SCOTLAND



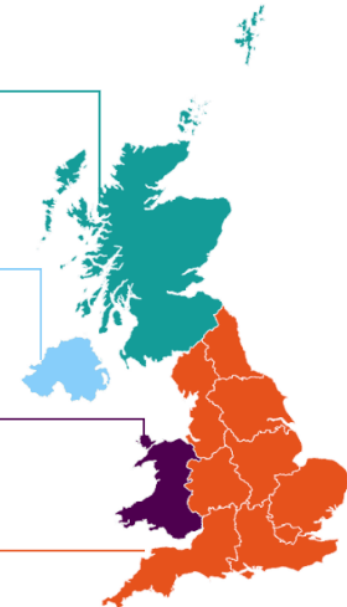
NORTHERN
IRELAND



WALES



ENGLAND



| Yr 4 | Maths | Reading and Literacy | Topic | Active/ Mindfulness | | | | | | |
|---------|--|----------------------|-------|---------------------|--|----|--|--|---|---|
| | <p>Log into purple mash and choose a maths activity to complete such as Monster Multiplication, 2Race or many others.</p> <p>Practise your 8 times tables – learn a song or poem to help you remember them.</p> <p>This YouTube video is a catchy way to learn them: https://www.youtube.com/watch?v=dSnNkqMbtfs</p>  <p>Use your knowledge of the 8 times tables to help you with these questions:</p> <p>1) Fill in the gaps below:</p> <table border="1" data-bbox="197 1289 656 1361"> <tr> <td>16</td> <td>24</td> <td></td> <td></td> <td>48</td> <td></td> </tr> </table> | 16 | 24 | | | 48 | | <p>Practice the following spellings:</p> <p>library _____</p> <p>material _____</p> <p>medicine _____</p> <p>mention _____</p> <p>minute _____</p> <p>natural _____</p> <p>naughty _____</p> <p>notice _____</p> <p>occasion _____</p> <p>occasionally _____</p> | <p>Visit the BBC Bitesize website to refresh your mind about the United Kingdom:</p> <p>https://www.bbc.co.uk/teach/class-clips-video/geography-ks1--ks2-the-united-kingdom/zhtgrj6</p> <p>Geography KS1/KS2: The United Kingdom</p> <p><small>BBC Teach - Primary resources - Geography KS1 / Geography KS2 - Explain This...</small></p>  <p>On Purple Mash, I have uploaded a PowerPoint presentation about the United Kingdom to help you.</p> <p>There's a catchy song the will help you remember some facts: https://www.youtube.com/watch?v=5XTGaGsyLbU https://www.youtube.com/watch?v=Jrka9Nt-nQo</p> <p>Questions:</p> <p>1) <i>What are the four countries of the United Kingdom?</i></p> | <p>Active:</p> <p>Check out this website and have a look at the PE Home Learning and 60 Second Challenges: https://www.youthsporttrust.org/free-home-learning-resources-primary</p>  <p>Check out this website and have a look at the PE Home Learning and 60 Second Challenges: https://www.youthsporttrust.org/free-home-learning-resources-primary</p> <p>Mindfulness:</p> <p>This link has some great ideas to look after yourself and others.</p> |
| 16 | 24 | | | 48 | | | | | | |

2) Fill in the gaps below:

$8 \times \underline{\quad} = 40$

$32 \div \underline{\quad} = 4$

$8 \times \underline{\quad} = 64$

$72 \div 8 = \underline{\quad}$

$8 \times \underline{\quad} = 96$

$48 \div \underline{\quad} = 8$

Spiders have 8 legs. Work out the number of legs for each amount of spiders:

- 2 spiders
- 4 spiders
- 7 spiders
- 7 spiders
- 10 spiders
- 3 spiders
- 12 spiders

Sarah has a pet spider.
Her pet spider ends up having 7 babies.
How many spiders' legs can Sarah count?

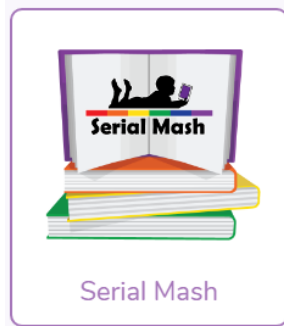
Subtraction

Use column subtraction to help you solve these questions:

Now write sentences using these new words.

Reading

Click on Serial Mash (part of purple mash) to access hundreds of books



You also get quizzes after you have read a chapter.

Check out Oxford Books online. There are offering free ebooks to support your reading as schools are closed.

<https://home.oxfordowl.co.uk/>

SPAG

Correct the sentences:

1) Yesterday, I go to the shops.

2) *What are the capital cities of each country?*

3) *What is a human feature in geography?*

4) *What is a physical feature in geography?*

5) *Can you name some major cities in the UK?*

6) *What are the seas that surround the UK?*

7) *Can you name 5 major rivers that run through the UK?*

8) *What is a county?*

9) *Name the county that we are in and the counties that surround us.*

10) *What are the 8 points of a compass?*

11) *From London, which direction would you have to travel to reach these towns and cities:*

- Peterborough
- Southend on Sea
- Brighton
- Bristol
- Oxford
- Colchester
- Maidstone
- Basingstoke

<https://www.cosmickids.com/mindfulness-activities-kids/>

This pack has some different activities that you can enjoy with your family:

<https://www.time-to-change.org.uk/sites/default/files/1-Mindfulness%20activity%20book.pdf>



| | | | | |
|---|---|---|--|--|
| | 3 | 3 | | |
| - | 1 | 1 | | |
| | | | | |

| | | | | |
|---|---|---|--|--|
| | 2 | 5 | | |
| - | 1 | 3 | | |
| | | | | |

| | | | | |
|---|---|---|--|--|
| | 2 | 3 | | |
| - | 1 | 7 | | |
| | | | | |

| | | | | |
|---|---|---|--|--|
| | 4 | 7 | | |
| - | 1 | 8 | | |
| | | | | |

| | | | | |
|---|---|---|---|--|
| | 2 | 7 | 3 | |
| - | | 2 | 1 | |
| | | | | |

| | | | | |
|---|---|---|---|--|
| | 4 | 9 | 3 | |
| - | | 6 | 2 | |
| | | | | |

Fill in the missing squares:

- 2) Tomorrow, I saw a dog in the park.
- 3) Last week, we go to the zoo but it is raining
- 4) The old car needs fixing but the new one don't.
- 5) On my shopping list, I have written eggs milk bread apples oranges and sweets.

12) *What do the terms 'Urban' and 'Rural' mean?*

13) *What are the advantages and disadvantages of urban living?*

14) *What are the advantages and disadvantages of rural living?*

15) *Would you prefer to live in an urban location or a rural location – why?*

Extensions:

Take a walk around your area and draw a sketch map. What do you see? Shops, restaurants, bus stops, train stations, football stadiums? Create symbols for these places and add to your sketch map.

Sketch or paint a picture of something that you like in your area.

| | | | |
|---|---|---|---|
| | 4 | | 6 |
| - | | 3 | |
| | 4 | 2 | 2 |

| | | | |
|---|---|---|---|
| | | 7 | 5 |
| - | 1 | | 1 |
| | 8 | 1 | |

Pick a pair

Choose from these numbers.



1. Pick a pair of numbers.
Add them together.
Write the numbers and the answer.

Pick a different pair of numbers.
Write the numbers and the answer.

Keep doing it.
How many different answers can you get?

2. Now take one number from the other.
How many different answers can you get now?

Rows of coins



1. Take five coins: 1p, 2p, 5p, 10p, 20p.
Put them in a row using these clues.
The total of the first three coins is 27p.
The total of the last three coins is 31p.
The last coin is double the value of the first coin.
 2. Take six coins: two 1p, two 2p and two 5p.
Put them in a row using these clues.
Between the two 1p coins there is one coin.
Between the two 2p coins there are two coins.
Between the two 5p coins there are three coins.
- What if you take two 10p coins as well, and between them are four coins?