

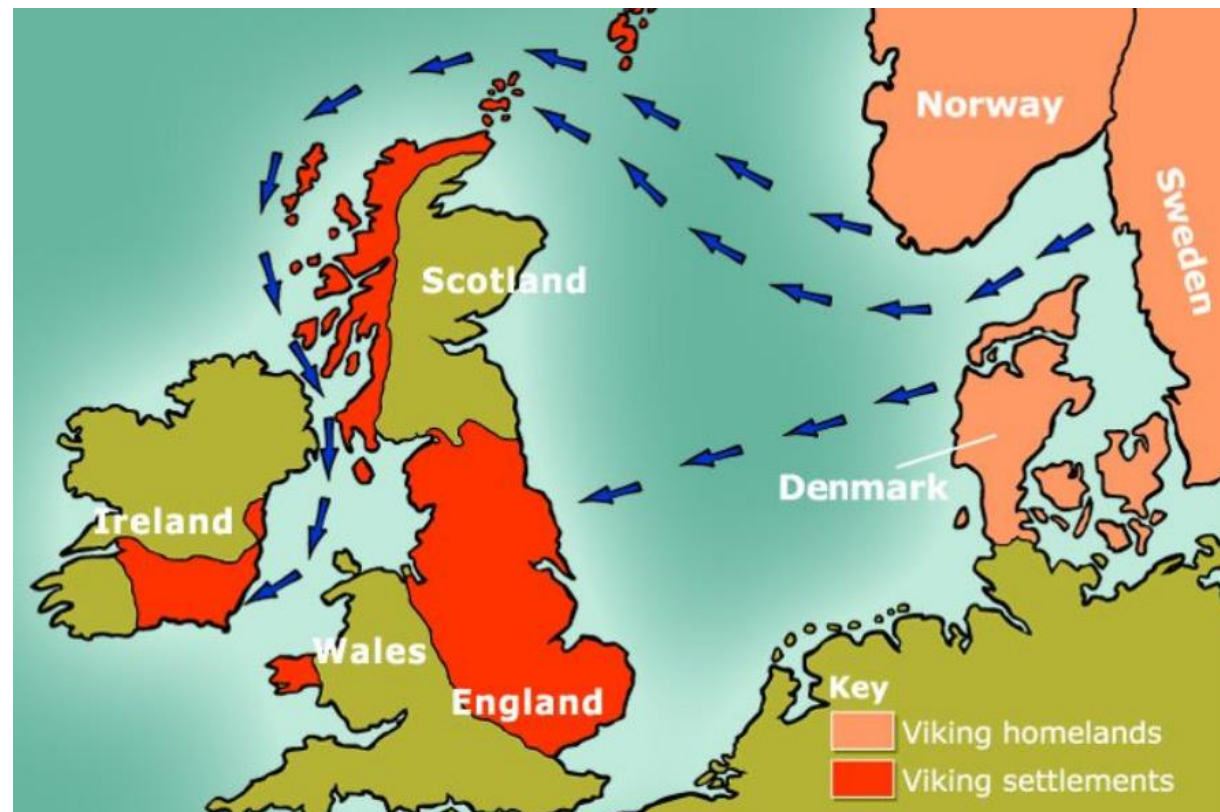
Weekly Tasks/Activities for Home Learning






Week beginning: Monday 29th June 2020

Hello Year 4,

As it is the final half term of this academic year, we are challenging you to explore how much you can remember about each topic. Therefore, every week, we will revisit one of the exciting topics we have learnt about this year.

Our revision topic this week will be our learning from Spring 1: Vikings



Yr 4	Maths	Reading and Literacy	Topic	Active/ Mindfulness
	<p>Log into purple mash and choose a maths activity to complete such as Monster Multiplication, 2Race or many others.</p> <p>Practise your 9 times tables – learn a song or poem to help you remember them.</p> <p>This YouTube video is a catchy way to learn them: https://www.youtube.com/watch?v=154VoUQbgvc</p>  <p>Use your knowledge of the 9 times tables to help you with these questions:</p> <p>Write the next three multiples of 9.</p> <p>9 18 27 36</p>	<p>Practice the following spellings:</p> <p>often</p> <p>opposite</p> <p>ordinary</p> <p>particular</p> <p>peculiar</p> <p>perhaps</p> <p>popular</p> <p>position</p> <p>possess</p> <p>possession</p>	<p>Visit the BBC Bitesize website to refresh your mind about the Vikings:</p> <p>https://www.bbc.co.uk/bitesize/topics/ztyr9j6</p>  <p>On Purple Mash, I have uploaded a PowerPoint presentation about the Vikings to help you.</p> <p>Questions:</p> <ol style="list-style-type: none"> 1) <i>Where did the Vikings come from?</i> 2) <i>What was life like for Vikings in their original home?</i> 3) <i>Why did they come to England?</i> 4) <i>What does Viking mean?</i> 5) <i>Who were the Anglo-Saxons?</i> 6) <i>What happened at Lindisfarne in 793CE?</i> 7) <i>Why were the Vikings so successful?</i> 	<p>Active:</p> <p>Sevens Ball Game</p> <p>You will need a ball.</p> <p>Practise your throwing and catching skills with this Sevens Ball Game challenge. Starting at 7 and working down to 1, complete each throwing and catching activity in order without dropping the ball. If you make a mistake, you must start back at number 7 again.</p>  <p>1</p> <p>Throw the ball up in the air, do a 360° turn and catch it, without a bounce. Complete once.</p>  <p>2</p> <p>Throw the ball up in the air, do a 360° turn, let the ball bounce once and catch it. Complete twice.</p> 

63 72

108 117 126

Complete the missing numbers.

9 ____ 27 ____ 54 ____

27 ____ 9 ____ - 18 ____

90 180 270 ____



Luidia senegalensis (pictured above), is a 9-armed star fish.

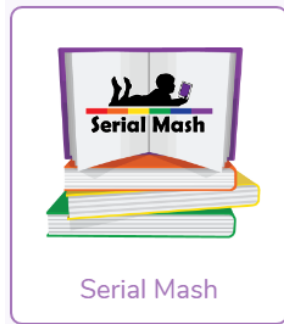
Work out the number of arms for each amount of star fish:

- 2 star fish
- 4 star fish
- 7 star fish
- 9 star fish

Now write sentences using these new words.

Reading

Click on Serial Mash (part of purple mash) to access hundreds of books



You also get quizzes after you have read a chapter.

Check out Oxford Books online. There are offering free ebooks to support your reading as schools are closed.

<https://home.oxfordowl.co.uk/>

SPAG

Correct the sentences:


- 1) the cat is soft

- 8) *Why were they great warriors?*
How did they live?
- 9) *What was home life like for the Vikings?*
How did they live?
- 10) *Who was Alfred the Great and what did he achieve?*
- 11) *What was Danelaw?*
- 12) *What was Danegeld?*
- 13) *How did the Viking rule end in England?*
- 14) *What happened in 1066?*

Extensions:

Write as if you are a monk on Lindisfarne when the Vikings arrived.

- What were you doing before they came?*
- How did you know they had arrived?*
- What did the look and sound like?*
- How did you feel when they came?*
- What did they do to you, the other monks and the monastery?*



3

Throw the ball under one leg, up in the air and catch it.
Complete 3 times.

Mindfulness:

Just One Breath

BREATHING ACTIVITY

Find a relaxing place, sit comfortably, and set a timer for one minute.

Breathe deeply in and out while paying attention to any sensations you notice or sounds you hear.

Take another slow deep breath, imagine the air moving down into the lungs and back up.

Take one more deep breath and hold for a moment, then release it.

- 10 star fish
- 3 star fish
- 12 star fish

Convince me number 36 will be in this sequence:

99, 90, 81

Short Multiplication

If you are unsure how to do short multiplication, then search for some videos online to help you or click the links below:

<https://www.khanacademy.org/math/arithmetic/arith-review-multiply-divide/arith-review-multi-digit-mult/v/2-digit-times-1-digit-example-no-carrying>

<https://www.khanacademy.org/math/arithmetic/arith-review-multiply-divide/arith-review-multi-digit-mult/v/3-digit-times-1-digit-example>

Use short multiplication to help you solve these questions:

	2	3		8	5
x		2	x		5

- 2) Tomorrow, I jumped in a puddle?
- 3) Where is the playground.
- 4) That is Kevins ball.
- 5) I want to visit Spain and France and Germany and Egypt and China.

Pretend you are a Viking and write a diary about your raids around England.



Go on a SAFARI

Go outside on an exciting adventure, try picking up a small rock or touching a plant or flower.



Notice the bugs or the birds. Take a moment to kneel down and touch the earth.

Walk mindfully paying close attention to everything. Make sure you walk in silence because you want to notice all those little details.



	5	3		2	1
x		4	x		3

	5	2	3
x			2

	8	5	3
x			4

Fill in the missing squares:

$$\begin{array}{r} \square 8 \\ \times \quad \square \\ \hline 272 \end{array}$$

$$\begin{array}{r} 8 \square \\ \times \quad 4 \\ \hline 324 \end{array}$$

$$\begin{array}{r} \square 1 \\ \times \quad \square \\ \hline 205 \\ \hline \end{array}$$