

Weekly Tasks/Activities for Home Learning

Week beginning: Monday 29th June 2020

Hello Year 6,

As it is the final half term of this academic year, we are challenging you to explore how much you can remember about each topic. Therefore, every week, we will revisit one of the exciting topics we have learnt about this year.

Our revision topic this week will be our learning from Autumn 2. Our topic was: WW2



Y	Maths	Literacy	Topic	Active/ Mindfulness
---	-------	----------	-------	---------------------

6 Daily maths activities will be set on PurpleMash, with further challenge. However, you can complete other maths activities on **My Maths**:

This week's focus will be on **Fractions**

Monday – ordering fractions

Use the digit cards to complete the statements.



$$\frac{\boxed{}}{\boxed{4}} > \frac{\boxed{}}{\boxed{6}} \quad \frac{\boxed{}}{\boxed{4}} < \frac{\boxed{6}}{\boxed{}}$$

Find three examples of ways you could complete the statement.

$$\frac{\boxed{}}{\boxed{}} < \frac{\boxed{}}{\boxed{}}$$

Can one of your ways include an improper fraction?

Spellings

This week we are looking at the words with the suffix **-ly**

Focus: The suffix -ly		
	A	B
1	seriously	courageously
2	properly	mysteriously
3	probably	deliberately
4	thoughtfully	unexpectedly
5	obediently	unfortunately
6	cheekily	wealthily
7	angrily	squeakily
8	unhappily	unsteadily
9	personally	accidentally
10	eventually	enthusiastically

Practise writing these words in your best handwriting, then ask a parent or a sibling to help you learn them.

Challenge: Can you use any of these words in a sentence?

Grammar

This week's focus is on adjectives. Using adjective makes our writing interesting.

As you read your home reading book find evidence of

1) VE Day celebrations

What is VE day?

VE Day - or 'Victory in Europe Day' - marks the day towards the end of World War Two (WW2) when fighting against **Nazi Germany in Europe** came to an end. **It was one of the most important moment in history.** Many people were extremely happy that the fighting had stopped and there were big celebrations and street parties. Huge crowds - with lots of people dressed in red, white and blue - gathered outside Buckingham Palace in London.



Imagine you are a reporter at one of these parties. You task it write a newspaper report retelling the main events of this historical day. Use these writing prompts to help you plan your report

Art and Design

All about Sketchbooks

Do you miss your school sketchbook? No problem, you can now make your own at home.

AccessArt has created a short online course suitable for all ages and all abilities to use at home. No special materials are required, and it is completely free to take part.

For more information, please follow the link below:

<https://www.accessart.org.uk/sketchbooks-an-online-course-for-children-families-parents-teachers/>

Active:

Roll and dice and follow the instruction shown by the this mat

Teddy is comparing $\frac{3}{8}$ and $\frac{5}{12}$

To find the lowest common multiple, I will multiply 8 and 12 together.
 $8 \times 12 = 96$
 I will use a common denominator of 96



Is Teddy correct?
 Explain why.

Tuesday- add and subtract fractions

A car is travelling from Halifax to Brighton.
 In the morning, it completes $\frac{2}{3}$ of the journey.
 In the afternoon, it completes $\frac{1}{5}$ of the journey.
 What fraction of the journey has been travelled altogether?
 What fraction of the journey is left to travel?

If the journey is 270 miles, how far did the car travel in the morning?
 How far did the car travel in the afternoon?
 How far does the car have left to travel?



What is an adjective?

BLUE COLD HAPPY

BLUE, COLD, AND HAPPY ARE ADJECTIVES

An adjective is a describing word.
 An adjective gives more information about something.

An adjective generally describes a noun.
 * A noun is a person, a thing, or a place.

The green monster
 adjective + noun
 The monster is green
 to be + adjective

BE CAREFUL! The green monster ✓
 The monster green ✗

All activities have been set on **Literacyplanet.com** and **Purple mash**

Please login to complete the activity.

Reading

Daily reading activities and comprehension are available on PurpleMash.
 Please remember to read the chapter book first before completing the comprehension. Look out for our new book on ...

VE Day Veteran



Photo courtesy of Paul Townsend (flickr.com) - granted under creative commons license

Who was _____?

Facts about _____

Memories of VE Day

VE Day occurred on the 8th May, 1945. It was a chance to celebrate the return of peace to Europe after the 6 years of war.

Today, we still mark VE Day but use it to remember those men and women who valiantly fought to bring about peace.

Research one of the veterans – a person who is an ex-member of the armed forces – and create a fact file about them. Apart from their name and age when they enlisted, include details of the force they worked in, where they were stationed, and in particular, any significant memories of VE Day they had.



MUST – Include the 5 Ws: Where, When, Who, What, Why.
SHOULD – Include a headline.

SUPERHERO DICE FITNESS

To be HEALTHY for a lifetime, it's important to get 60 Minutes of physical activity every day! Play Super Hero Dice Fitness every day. Roll the dice, perform the exercise that matches the number rolled. Start with 5's for each exercise and increase the number of repetitions you do every day for each exercise.

CURL-UPS
 PUSH-UPS
 SQUATS

JUMPING JACKS
 CRAB KICKS
 PRETEND JUMP ROPE

Follow the links below to find different exercise activities you can complete:

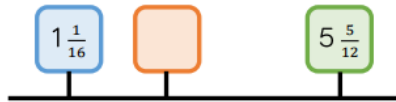
Just Dance
<https://www.youtube.com/channel/UC0Vlhde7N5uGDIFXXWWEbFQ>

Cosmic Kid's yoga
<https://www.youtube.com/user/CosmicKidsYoga>

Check out this website and have a look at the **PE Home Learning** and **60 Second Challenges:**

Wednesday- subtract fraction

A blue, orange and green box are on a number line.



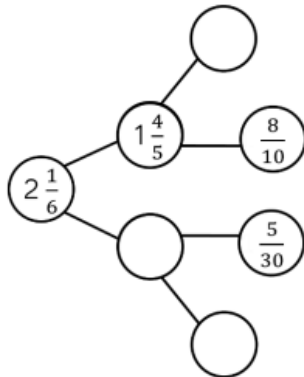
The number in the green box is $3\frac{2}{3}$ more than the orange box.

The number in the orange box is:

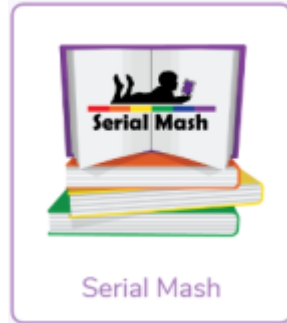


The number in the orange box is $\frac{8}{6}$ greater than the number in the blue box.

Complete the part-whole model.



Thursday- Add and subtract mixed numbers



So, get cracking!

GetEpic is becoming more and more popular. Read continue to read and if you still don't have a login please call the school with your email address and you will be added.

Writing:

Use the given image to write a descriptive spooky story (see below for bigger image). Remember to include all the different writing strategies including:

- different sentence starters
- a range of sentence types

CHALLENGE – Use direct quotes from two eye witnesses, remembering to include their names and what they were doing at the scene.

2) **Letter to a loved one**

Many British soldiers were encourage to join the war efforts to defend their country against the German resistance. Many of them were forced to travel abroad away from their families for months. Imagine you are abroad, write a letter to your loved ones at home telling them what life is like at the front line.

3) **Twinkl is currently free. Please search some of**

Write a letter from the front line to a loved one

Tell your loved one what the front lines are like; think about smells, sounds and looks. What have you been doing during the day; walking, fighting, sleeping or eating? Tell them about the food that you eat and how you are feeling.



Dear _____

All my love from _____



At the top of your letter write the place of your front line or your country and the date.

the e-books on WW2 to remind you of our learning including this Code-Cracking for beginners eBook

<https://www.youthsporttrust.org/free-home-learning-resources-primary>


Mindfulness:


Being active is a good way to aid your wellbeing. It improves your physical & mental health, can improve your mood, boost self-esteem, quality of sleep and decrease stress, depression and anxiety. The NHS states that exercise is the 'miracle cure' we have always had and suggest we should try and complete at least 30 minutes of physical activity a day...

This link has some great ideas to look after yourself and others. Nate Bower's fitness with kids

The mass of Annie's suitcase is $29\frac{1}{2}$ kg.
Teddy's suitcase is $2\frac{1}{5}$ kg lighter than Annie's.
How much does Teddy's suitcase weigh?
How much do the suitcases weigh altogether?

There is a weight allowance of 32 kg per suitcase.
How much below the weight allowance are Annie and Teddy?



Find the value of the 

$$\text{Heart icon} + 3\frac{4}{9} = 6\frac{1}{3}$$

$$8\frac{1}{10} - \text{Heart icon} = \text{Sun icon}$$

Friday-Multiply fractions

- the use of different figurative language including similes, metaphors, personification and onomatopoeia.

6 Adjectives to describe this image:


- .
- .
- .
- .
- .
- .

2 Sentences that describe this image:

- 1.
- 2.

Imagine you are alone, walking through this space, use the senses to describe how you're feeling.

Task: You are entering a creative writing competition. Use this image to create a spooky story.



Code-Cracking for Beginners eBook

★★★★★ (2 member reviews)



4) Science

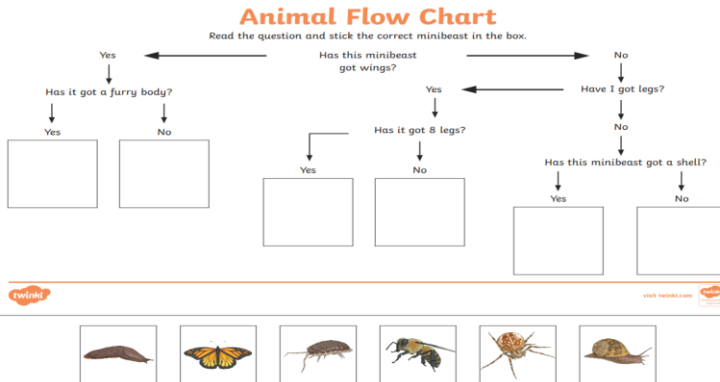
Classification keys are often used to separate different animals into their own groups. Use this idea to complete the two (insects and classification keys below.

Animal Flow Chart

Read the question and stick the correct minibeast in the box.

```

    graph TD
      Q1[Has this minibeast got wings?] -- Yes --> Q2[Has it got a furry body?]
      Q1 -- No --> Q3[Have I got legs?]
      Q2 -- Yes --> B1[ ]
      Q2 -- No --> B2[ ]
      Q3 -- Yes --> Q4[Has it got 8 legs?]
      Q3 -- No --> Q5[Has this minibeast got a shell?]
      Q4 -- Yes --> B3[ ]
      Q4 -- No --> B4[ ]
      Q5 -- Yes --> B5[ ]
      Q5 -- No --> B6[ ]
  
```



Challenge:

Can you create one of your own? Choose several different animals or plants and use different scientific questions to separate them into their own groups


<https://www.youtube.com/watch?v=WmGjXU3Ggko>

Transition unit.


Complete the activity sheet below which addresses some of the questions you might be having about moving to year 7

There are 9 lamp posts on a road. There is $4\frac{3}{8}$ of a metre between each lamp post.

What is the distance between the first and last lamp post?

Use pattern blocks, if  is equal to 1 whole, work out what fraction the other shapes represent.

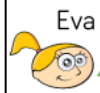
Use this to calculate the multiplications. Give your answers in their simplest form.

 $\times 5 =$

 $\times 5 =$

 $\times 5 =$

Eva and Amir both work on a homework project.



Eva

I spent $4\frac{1}{4}$ hours a week
for 4 weeks doing my
project.

I spent $2\frac{3}{4}$ hours a week
for 5 weeks doing my
project.



Amir

Who spent the most time on their project?

Explain your reasoning.

6 Adjectives to describe this image

-
-
-
-
-
-

2 Similes that describe this image:

- 1.
- 2.

Imagine you are alone, walking through this space,
use the senses to describe how you're feeling

.....

.....

.....

.....

.....

Task: You are entering a creative writing
competition! Use this image to create a spooky
story...



Session 1

Being awesome

TASK: Is there anything holding you back?

Worried you can't do things

Feeling embarrassed

You find it hard to focus

Scared of hard work

Feeling stressed or anxious

Fear of looking foolish

Scared of taking risks



TASK: Write down what you can learn from your primary school experience ahead of going to secondary school.

- How did you handle things when they went wrong?

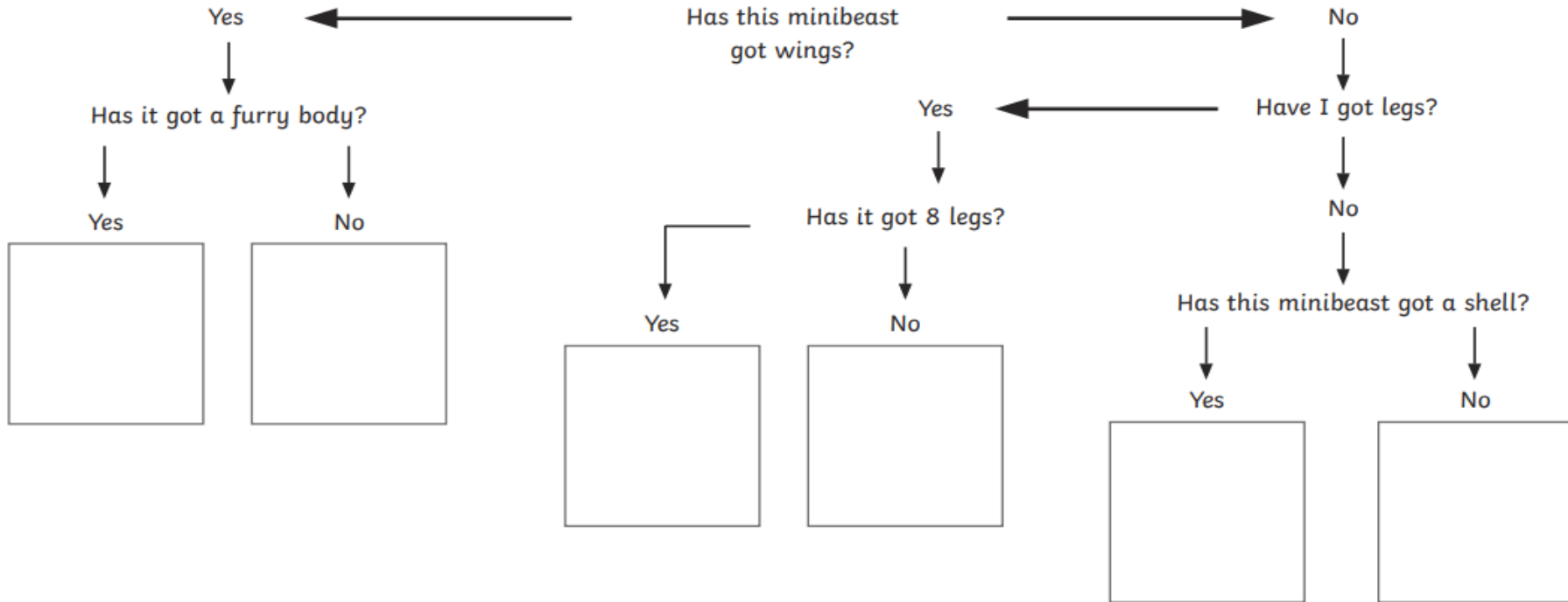
- How did you react when you got stuck?

- Think about a time when you showed a 'kid awesome' attitude. Write about it here:

- Write down the kind of person you want to be at secondary school.

Animal Flow Chart

Read the question and stick the correct minibeast in the box.

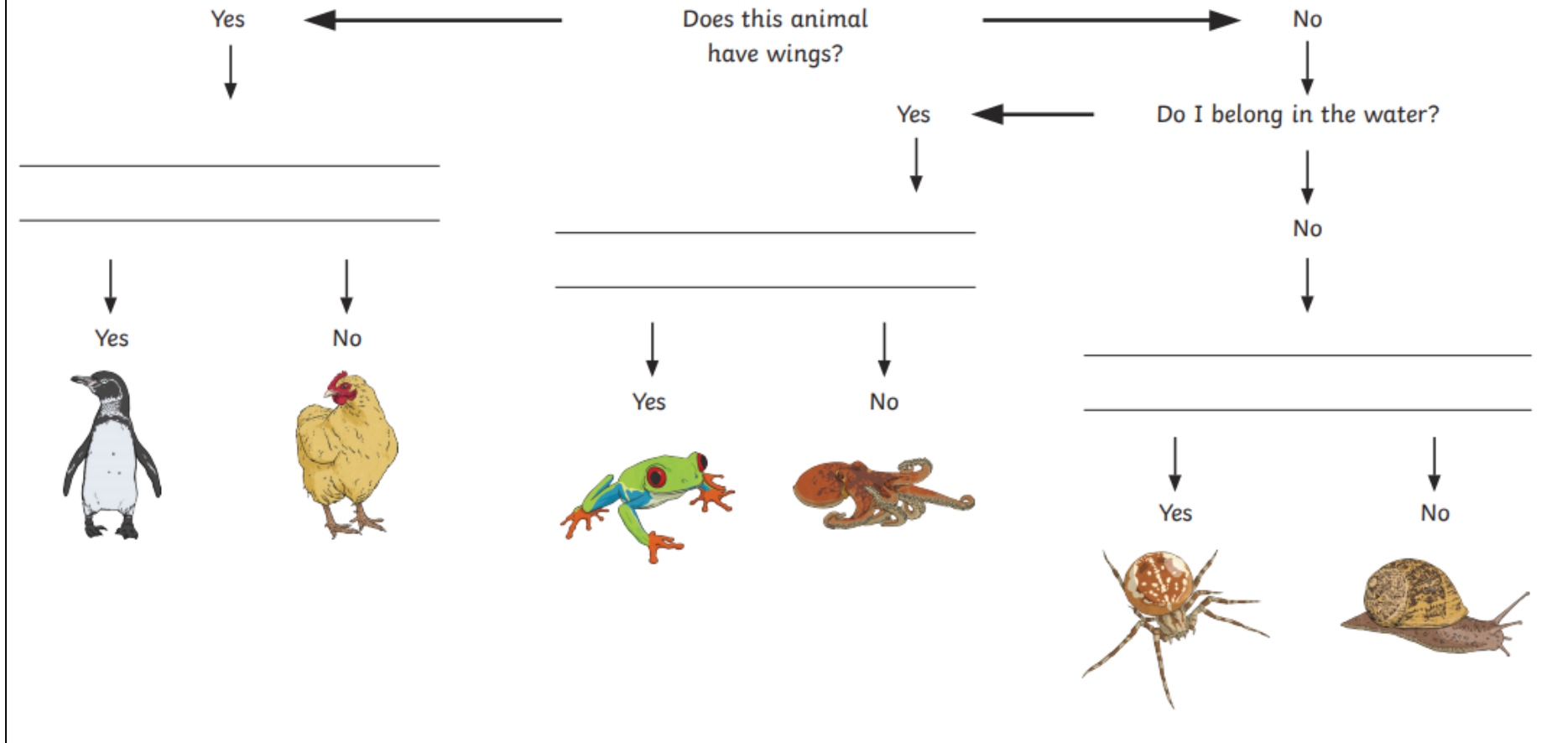


visit [twinkl.com](https://www.twinkl.com)



Animal Flow Chart

Complete this flow chart



Focus: The suffix **-ly**

	A		B
1	seriously		courageously
2	properly		mysteriously
3	probably		deliberately
4	thoughtfully		unexpectedly
5	obediently		unfortunately
6	cheekily		wealthily
7	angrily		squeakily
8	unhappily		unsteadily
9	personally		accidentally
10	eventually		enthusiastically

