

Lets play the splat game.

CT to say a number.

CT to use problems: 1 more than 16 etc.

Menu
⌵

Select mode

☐
☀
👁

Pick a color

Pick a puzzle

- Missing number
- 1 more & 1 less
- Lines
- Cross
- Patterns

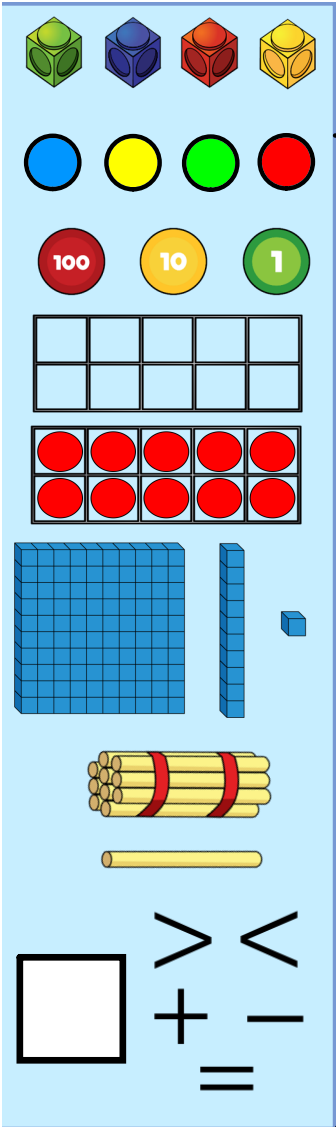
New

↶ Flip
▶ 0

🔍 All
🔄 Reset

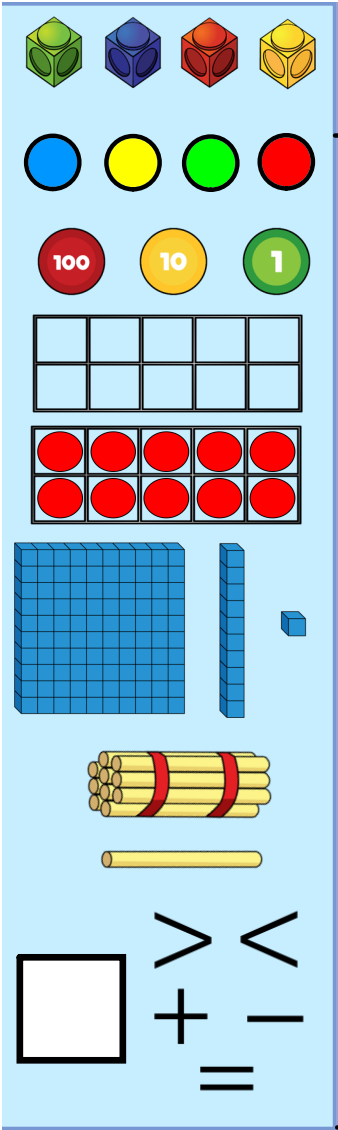
1	2	3	4	5	6	7	8	9	10
11	12	13	14	15	16	17	18	19	20
21	22	23	24	25	26	27	28	29	30
31	32	33	34	35	36	37	38	39	40
41	42	43	44	45	46	47	48	49	50
51	52	53	54	55	56	57	58	59	60
61	62	63	64	65	66	67	68	69	70
71	72	73	74	75	76	77	78	79	80
81	82	83	84	85	86	87	88	89	90
91	92	93	94	95	96	97	98	99	100

<https://www.topmarks.co.uk/learning-to-count/paint-the-squares>



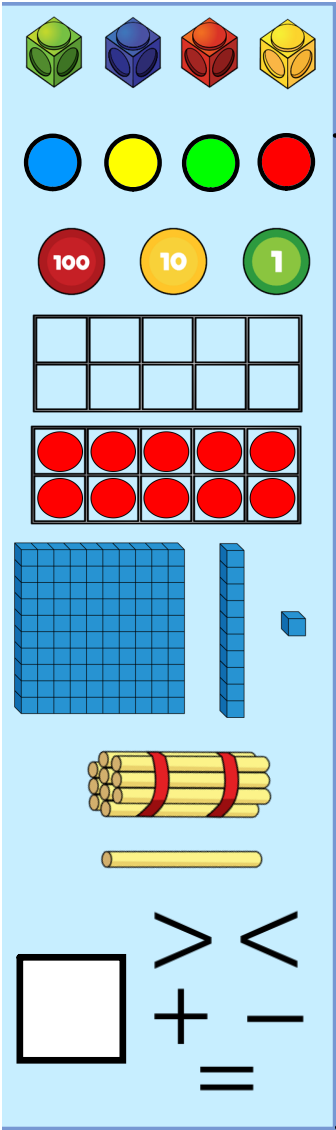
What numbers have I hidden?

1	2	3	●	5	6	7	8	9	10
11	12	●	14	15	16	●	18	●	20
21	22	23	24	25	26	27	28	29	30
●	32	33	34	35	●	37	38	39	40
41	42	43	44	45	46	47	48	49	50
51	52	53	54	●	56	57	58	59	60
61	62	63	●	65	66	67	●	69	●
71	72	73	74	75	76	77	78	79	80
81	●	83	84	85	86	●	88	89	90
91	92	93	94	95	96	97	98	99	100



Fill in the missing numbers

1	2	3		5	6	7	8	9	10
11	12	13	14	15	16	17		19	20
21	22	23	24	25		27	28	29	



Activity:

Count in 2s to get to the end of the maze

Can you fill in the missing numbers?

1	2	3		5	6	7	8	9	10
11	12	13	14	15	16	17		19	20
21	22	23	24	25		27	28	29	
31	32	33	34	35	36	37	38	39	40
41		43	44	45	46	47	48	49	50
51		53	54	55	56	57	58	59	60
61	62	63		65	66	67	68	69	70
71	72		74	75	76	77	78		80
81	82	83	84	85			88	89	90
	92	93	94	95		97	98	99	100

