

Lets count in 2s.

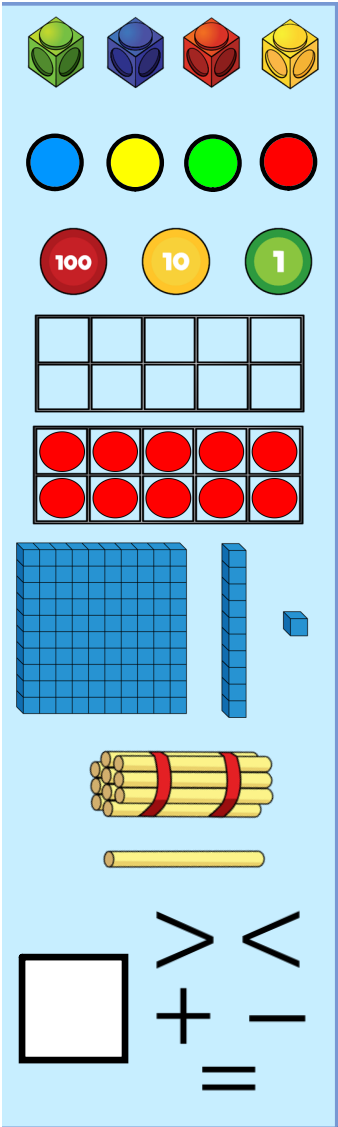


<https://www.youtube.com/watch?v=MPda14jMNSA>

What comes next?

2 4 6 8

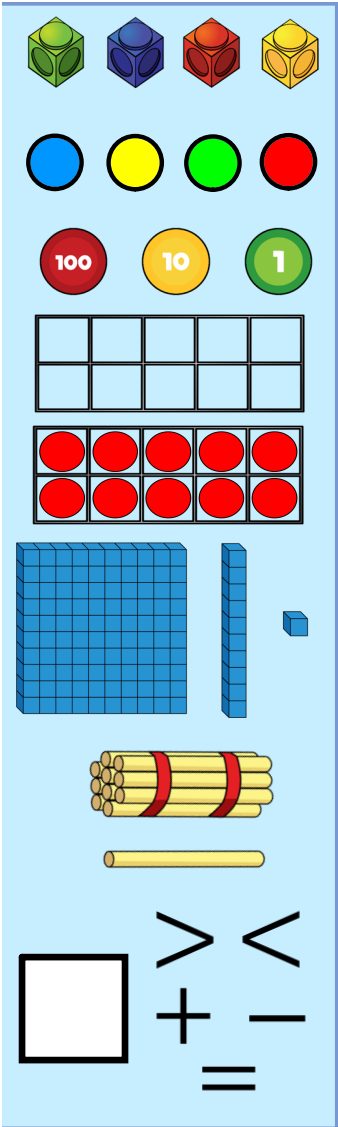
14 16 18 20



What comes next?

22 26 28 32

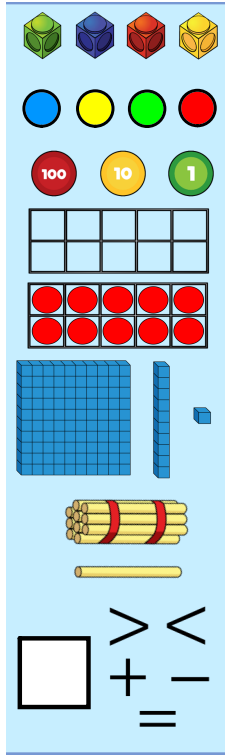
42 46 48 50



Count in 2s to find your way to the finish

Start	2	28	9	5	3	1
45	4	6	8	10	15	22
38	33	49	30	Finish	20	28

clue: start at 2 and count 2 more what comes next? It is 4.



Activity:

Count in 2s to get to the end of the maze

Christmas Counting in 2s Maze

Start	2	28	9	5	3	1
45	4	6	8	10	15	22
38	33	49	30	12	20	28
52	20	18	16	14	58	65
62	22	71	40	41	72	73
77	24	26	19	50	55	93
94	89	28	30	32	34	93
104	101	42	40	38	36	96
103	105	44	46	48	50	Finish