

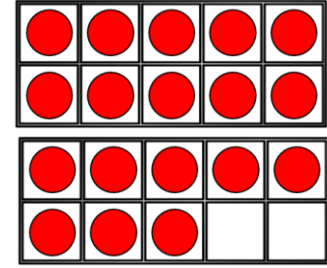
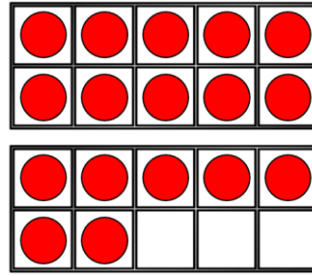
# COMPARE NUMBERS



**GET READY**

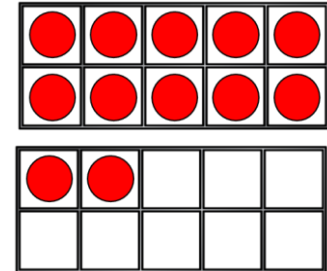
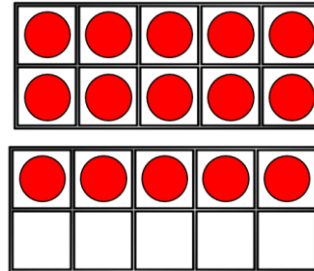


1) Which is the most?



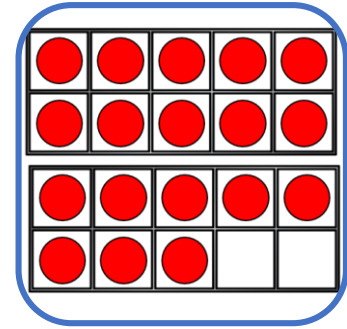
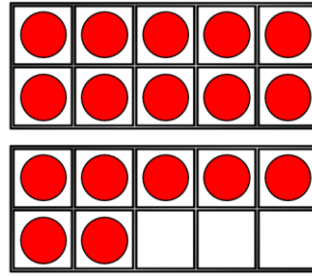
2) 1 ten and 4 ones =

3) Which is the least?



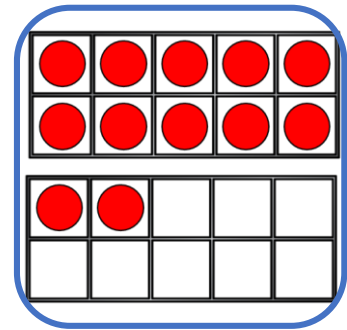
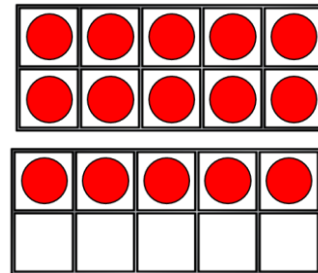
4) Seventeen = 1 ten and \_\_\_\_ ones

1) Which is the most?



2) 1 ten and 4 ones = 14

3) Which is the least?



4) Seventeen = 1 ten and 7 ones

LET'S LEARN



Which is the greatest?

sixteen

16

$10 + 1$

11

13

13

$10 + 7$

17

twelve

12

Which is the least?

sixteen

16

$10 + 1$

11

13

13

$10 + 7$

17

twelve

12

Have a think



11	12	13	14	15	16	17	18	19	20
----	----	----	----	----	----	----	----	----	----

greater than

less than

equal to

16 is less than seventeen

nineteen is equal to 1 ten and 9 ones

$10 + 6$  is greater than twelve



YOUR TURN

Have a go at questions  
1 and 2 on the  
worksheet



Let's use symbols to compare!

11	12	13	14	15	16	17	18	19	20
----	----	----	----	----	----	----	----	----	----

$>$     $=$     $<$

$$18 < 20$$

$$16 > 12$$

$$13 < 18$$

Let's use symbols to compare!

11	12	13	14	15	16	17	18	19	20
----	----	----	----	----	----	----	----	----	----

$>$     $=$     $<$

16  $>$  fifteen

eleven  $<$  1 ten and 9 ones

$10 + 10 =$  twenty

YOUR TURN

Have a go at question 3  
on the worksheet



Have a think



14 is **greater than** 1 ten and **2** ones

14 is **greater than** 1 ten and **3** ones

Have a think



14 is **greater than** 1 ten and **2** ones

14 is **greater than** 1 ten and **3** ones

---

14 is **less than** 1 ten and **5** ones

14 is **less than** 1 ten and **7** ones

Have a think



14 is **greater than** 1 ten and **2** ones

14 is **greater than** 1 ten and **3** ones

---


14 is **less than** 1 ten and **5** ones

14 is **less than** 1 ten and **7** ones

---

14 is **equal to** 1 ten and **4** ones

14 is **equal to** 1 ten and **4** ones



I think I will practise  
using words and symbols  
to compare numbers.

greater than

less than

equal to

is  1 ten and  ones

is



YOUR TURN

Have a go at question 4  
on the worksheet

